



# Chromatische Intervalle VI

(Große, kleine, reine, augmentierte und verminderte Intervalle)


Schreibe oberhalb der gegebenen Note die Note, die das Intervall vervollständigt.




aug 3




aug 8




k7




aug 7




aug 6




verm 4




R4




G6




k3



aug 3




k6




aug 8



R4



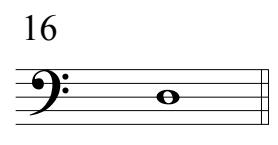
k7




verm 8



k3



G6



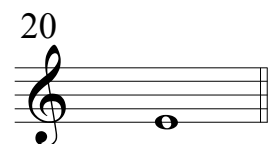
R5




aug 2




verm 2




G7




aug 5



k7



aug 4



verm 3