




Große, kleine und reine Intervalle VI

Schreibe oberhalb der gegebenen Note die Note, die das Intervall vervollständigt.


Beispiel 


R4


1 
k7


2 
k3


3 
G7


4 
k7


5 
R4


6 
R5

7 
G3


8 
G6


9 
k6


10 
G7


11 
G2


12 
k7


13 
k6


14 
G7


15 
k6


16 
G3


17 
k7


18 
k2

19 
k7

20 
k3

21 
R4

22 
k6

23 
G7

24 
G3