



Große, kleine und reine Intervalle IV


Schreibe oberhalb der gegebenen Note die Note, die das Intervall vervollständigt.

Beispiel 


k6

1 


R5

2 


k3

3 


G6

4 


k7

5 


G3

6 

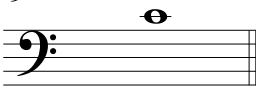
G6

7 

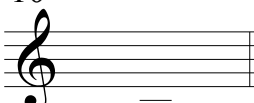
R4

8 

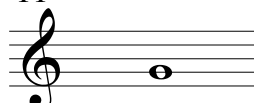
G7

9 

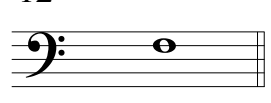
k3

10 


R8

11 


k6

12 


R5

13 


G2

14 

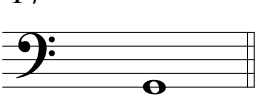
R4

15 


G6

16 


k2

17 


G7

18 


k6

19 


R4

20 


G3

21 


G6

22 

R8

23 

k7

24 

G3